
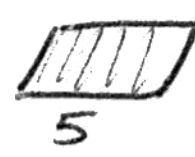


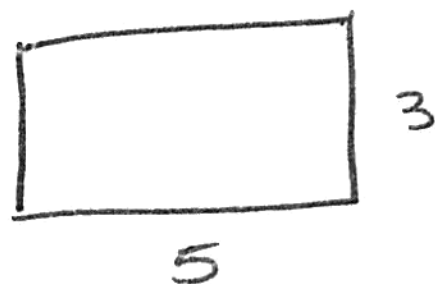
NAME: _____

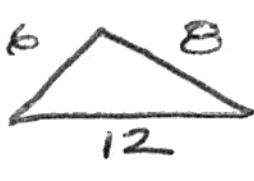
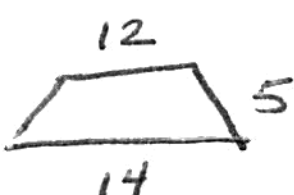
REVIEW

- ① WHAT IS THE FORMULA FOR FINDING THE AREA OF RECTANGLES  3 AND PARALLELOGRAMS  3?

$$A =$$

- ② HOW DO YOU FIND THE PERIMETER OF A RECTANGLE?



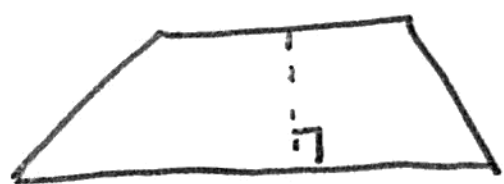
- ③ HOW DO YOU FIND THE PERIMETER OF TRIANGLES  AND TRAPEZOIDS ?

- ④ HOW DO YOU FIND THE AREA OF TRIANGLES?



$$A =$$

- ⑤ HOW DO YOU FIND THE AREA OF TRAPEZOIDS?



$$A =$$

- ⑥ HOW DO YOU FIND THE CIRCUMFERENCE OF A CIRCLE?

$$C = \pi d \text{ or}$$

$$C =$$

- ⑦ HOW DO YOU FIND THE AREA OF A CIRCLE?

$$A =$$